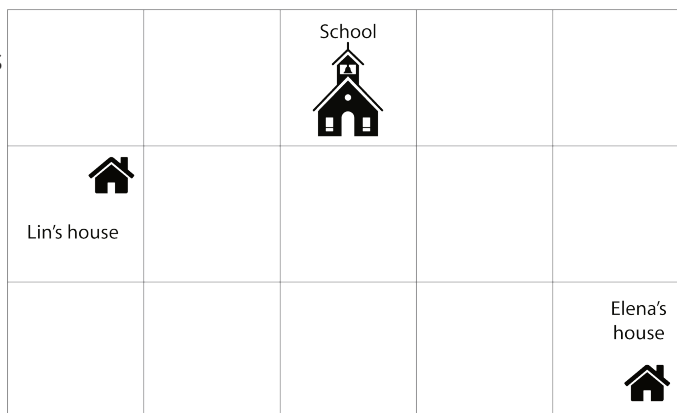


Lesson 2: Anchoring Units of Measurement


Cool Down: So Much in Common

Lin and Elena have discovered they have so much in common.


1. They each walk 500 units to school. Who walks 500 feet, and who walks 500 yards? Explain your reasoning.



2. They each have a fish tank holding 20 units of water. Whose tank holds 20 gallons, and whose holds 20 cups? Explain your reasoning.




Lin's fish bowl




Elena's fish tank

3. They each have a brother who weighs 40 units. Whose brother weighs 40 pounds, and whose weighs 40 kilograms? Explain your reasoning.



Elena's Brother



Lin's Brother