

## Grade 2 Unit 8

Lesson 6

CC BY 2021 Illustrative Mathematics®

## Unit 8 Lesson 6: Center Day 1

### WU Number Talk: Two More (Warm up)

#### Student Task Statement

Find the value of each expression mentally.

- $2 + 2 + 2$
- $2 + 2 + 2 + 2$
- $2 + 2 + 2 + 2 + 2$
- $2 + 2 + 2 + 2 + 2 + 2$

### 1 Introduce Write Numbers, Skip Count by 2, 5, and 10


#### Student Task Statement

#### 2 Centers: Choice Time


#### Student Task Statement

Choose a center.

Write Numbers

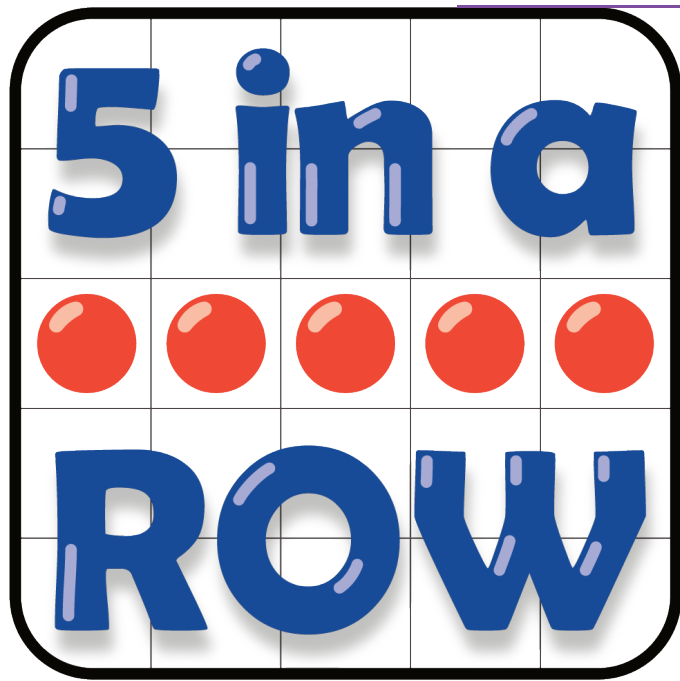


Target Numbers



Five in a Row

How Close



---

$$\square \square + \square \square = \underline{\quad}$$