

## Grade 1 Unit 3

### Lesson 9

CC BY 2021 Illustrative Mathematics®

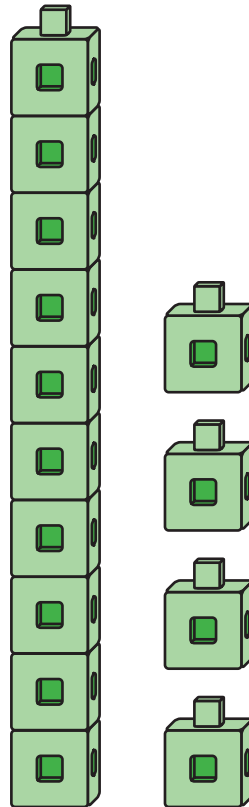
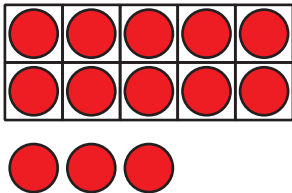
## Unit 3 Lesson 9: Addition With a Ten

### WU Notice and Wonder: Teen Numbers (Warm up)

#### Student Task Statement

What do you notice?

What do you wonder?


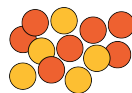


### 1 Make It: Teen Numbers and 10-Frames

#### Student Task Statement

Use your 10-frames to build teen numbers.

Write an equation that matches the teen number.



teen number	equation

If you have time, write another equation for each of the teen numbers.

## 2 Equations With a Ten

### Student Task Statement

Find the number that makes each equation true.

Show your thinking using drawings, numbers, or words.

1.  $14 = 10 + \square$

2.  $10 + 5 = \square$

3.  $16 = \square + 6$

---

4.  $10 + \square = 12$

5.  $\square + 3 = 13$

6.  $13 = \square + 10$