

Grade 1 Unit 3

Lesson 18

CC BY 2021 Illustrative Mathematics®

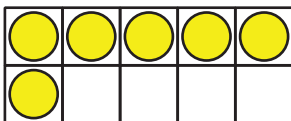
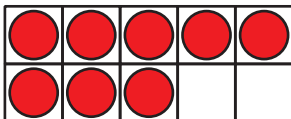
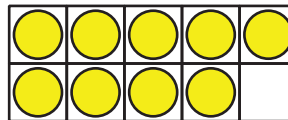
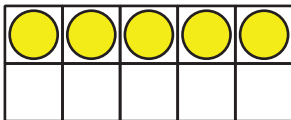
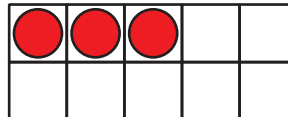

Unit 3 Lesson 18: Patterns in Addition

WU How Many Do You See: More Double 10-frames (Warm up)

Student Task Statement

How many do you see?

How do you see them?



1 Expression Match

Student Task Statement

1. Take out all the expression cards that have the number 10.
2. Mix up the rest of the cards.
3. Pick a card.
4. Place the card under the expression with 10 that it is equal to.



2 Compare and Connect: Gallery Walk

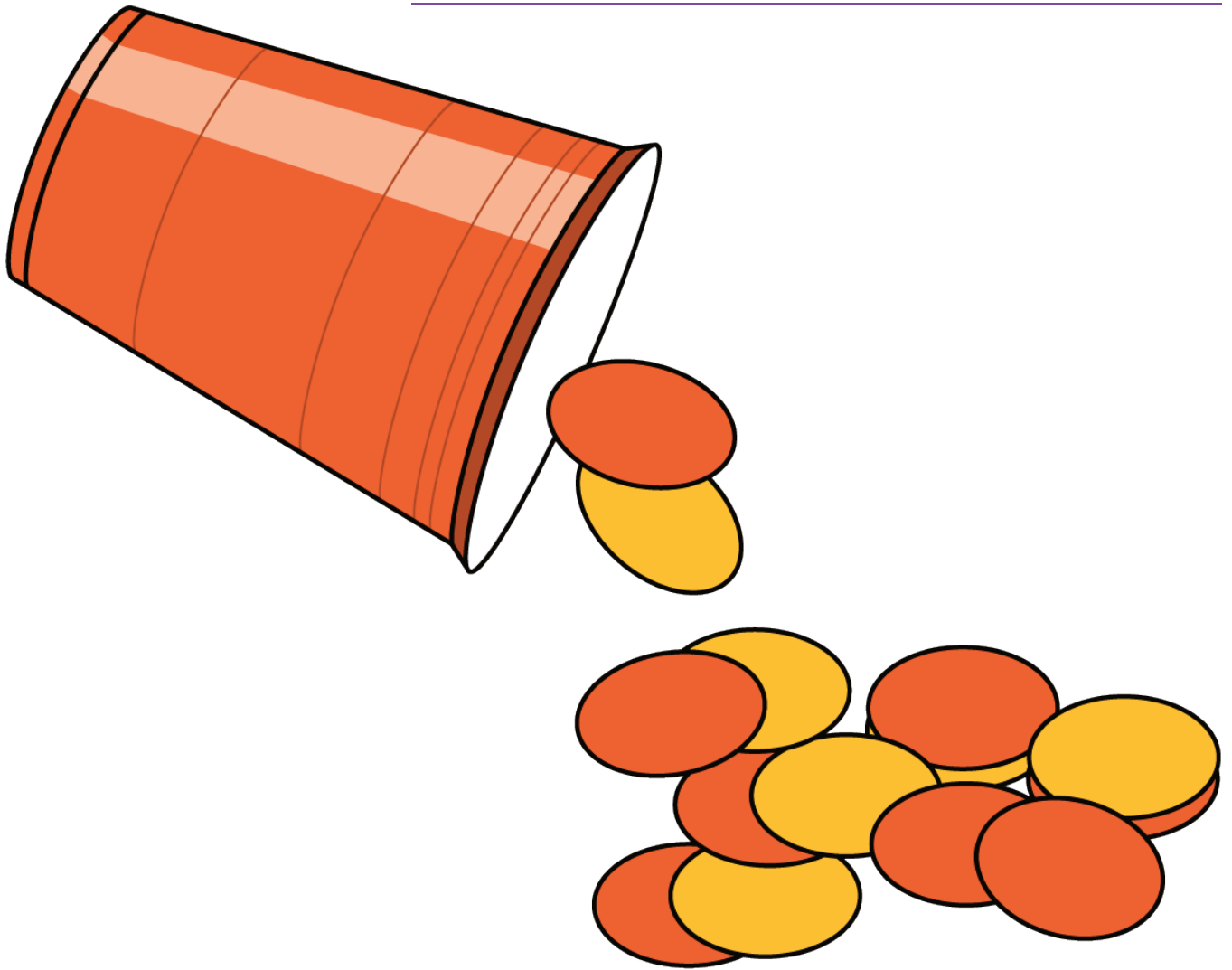
Student Task Statement

3 Centers: Choice Time

Student Task Statement

Choose a center.

Shake and Spill



Compare

 $3 + 1$



5

Number Puzzles

$14 = 8 + \square$