

Grade 4 Unit 1

Lesson 1

CC BY 2021 Illustrative Mathematics®

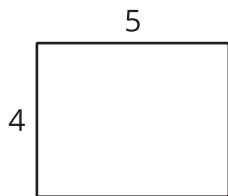
Unit 1 Lesson 1: Multiples of a Number

WU Which One Doesn't Belong: All Kinds of Area (Warm up)


Student Task Statement

Which one doesn't belong?

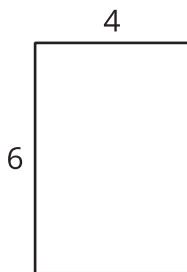
A



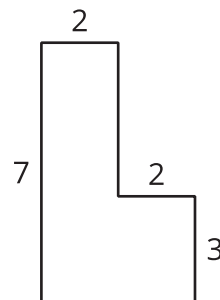
B



C



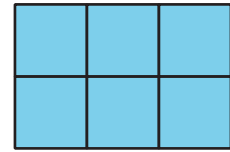
D



1 Build Rectangles and Find Area

Student Task Statement

1. Build 5 different rectangles with each of the given widths. Record the area of each rectangle in the table.



	area of rectangle				
2 tiles wide					
3 tiles wide					
4 tiles wide					

2. Discuss with a partner what you notice about the areas in each row of the table.
3. Predict the area of another rectangle that has each width. Explain your reasoning.
 - 2 tiles:
 - 3 tiles:
 - 4 tiles:

2 What Areas Can You Build?

Student Task Statement

1. Elena is building rectangles with a width of 3 units and an area of 30 square units or less.
 - a. Build the rectangles Elena could make and draw the rectangles on grid paper. Label the area and the side lengths of each rectangle.
 - b. What is the area of each rectangle you built?
 - c. What do you notice about the areas?
2. Why is 28 square units not a possible area for a rectangle with a width of 3 units?
3. If the area of the rectangle can be more than 30 square units, find 2 other areas it could have. Explain or show your reasoning.
4. What is an area that is not possible for a rectangle with a width of 3 units? Explain or show your reasoning.