

## Grade 1 Unit 7

Lesson 14

CC BY 2021 Illustrative Mathematics®

## Unit 7 Lesson 14: Half of the Clock

### WU Number Talk: Work with 30 (Warm up)

#### Student Task Statement

Find the value of each expression mentally.

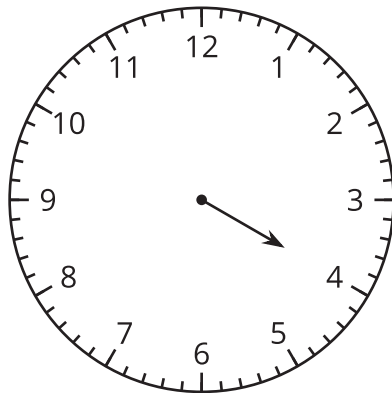
- $30 + 10$
- $30 + 15$
- $30 + 30$
- $30 + 35$

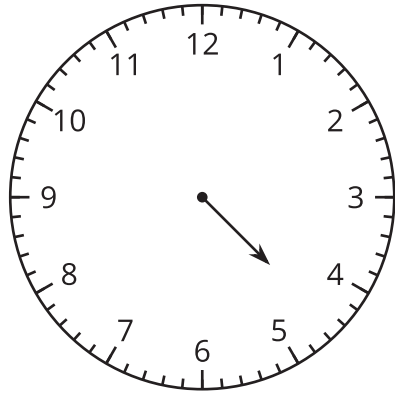
### 1 Put Times in Order

#### Student Task Statement

What do you notice?

What do you wonder?





## 2 Half Past What?

### Student Task Statement

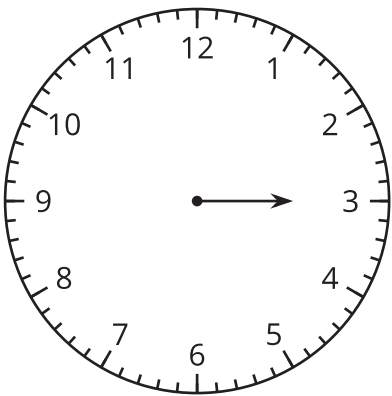
What time is shown on each clock?

If the time is half past, color the clock red.

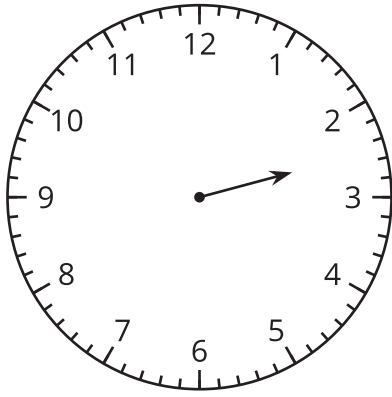
If the time is o'clock, color the clock blue.

Write the time in words using **half past** or **o'clock**.

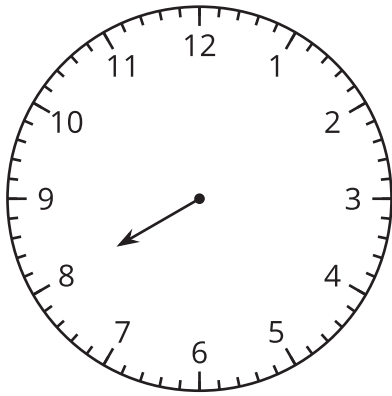
1.



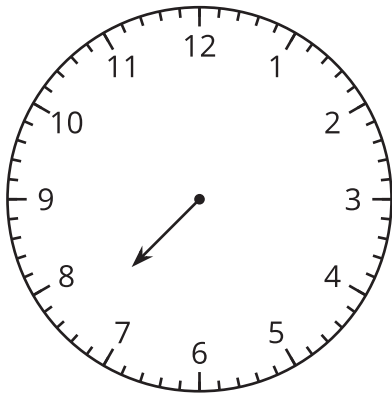
2.



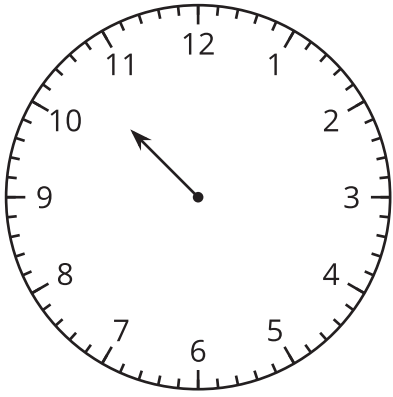
3.



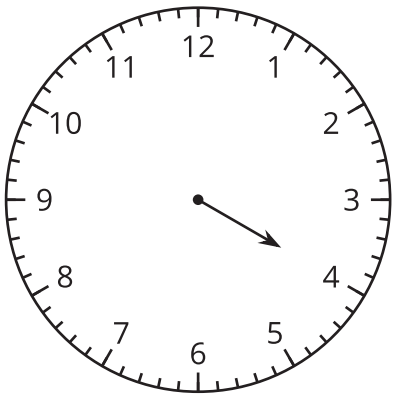
4.



5.



6.



---

### 3 Notice and Wonder: The Hands on the Clock Go Round and Round

Student Task Statement

