

Lesson 4: More Addition and Subtraction with Tens

- Let's add and subtract tens.

Warm-up: Number Talk: Plus or Minus 10

Find the value of each expression mentally.

- $30 + 10$

- $40 + 10$

- $80 - 10$

- $70 - 10$

4.1: How Many Are in the Bag?

1. Jada is counting collections of cubes.

In Bag A there are 30 cubes.

In Bag B there are 2 towers of 10.

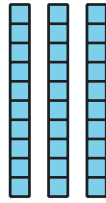
How many cubes are in the two bags all together?

Show your thinking using drawings, numbers, or words.

2. Tyler is counting a collection of cubes.
In Bag C there are 7 towers of 10.
He takes 40 cubes out of the bag.
How many cubes does he have left in the bag?
Show your thinking using drawings, numbers, or words.

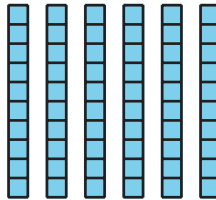
4.2: Add and Subtract Tens

1. Add 20:



Equation: _____

2. Subtract 20:



Equation: _____

3. 4 tens and 5 tens is _____

Equation: _____

4. 8 tens take away 3 tens is _____

Equation: _____

$5.20 + 60 = \square$

$6.70 - 20 = \square$


$7.90 - 70 = \square$

$8.40 + 40 = \square$

Section Summary

Section Summary

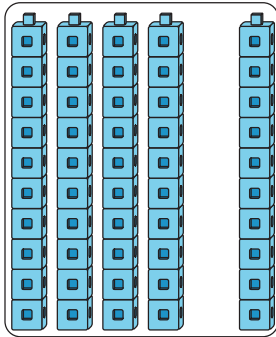
We learned how to show tens in different ways.



6 tens

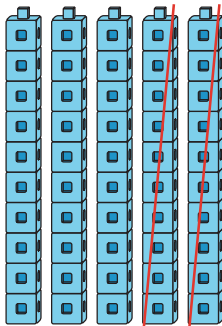
60

We learned how to add and subtract tens from other tens.



4 tens and 1 ten is 5 tens

$$40 + 10 = 50$$



5 tens take away 2 tens is 3 tens

$$50 - 20 = 30$$