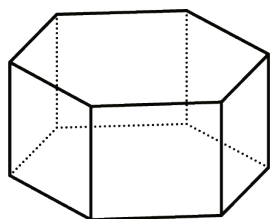


# Lesson 13: Polyhedra

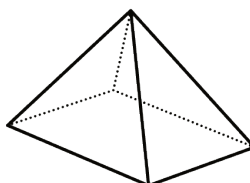
## Cool Down: Three-Dimensional Shapes

1. Write your best definition or description of a polyhedron. If possible, use the terms you learned in this lesson.

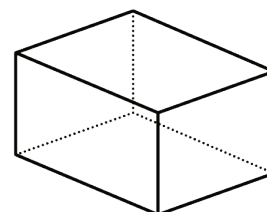
2. Which of these five polyhedra are prisms? Which are pyramids?



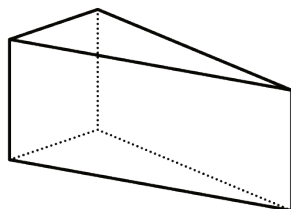
A



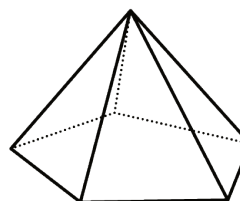
B



C



D



E