

Grade 5 Unit 8

Lesson 18

CC BY 2021 Illustrative Mathematics®

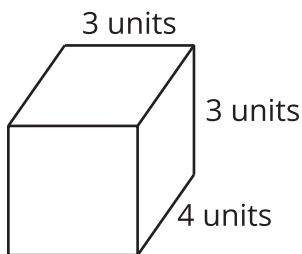
Unit 8 Lesson 18: Which One Doesn't Belong?

WU Which One Doesn't Belong? Volume (Warm up)

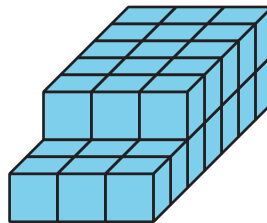
Student Task Statement

Which one doesn't belong?

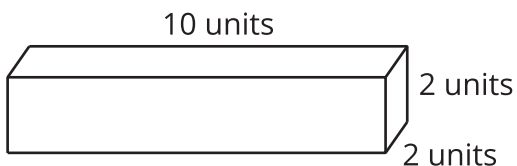
A



B



C



D



1 Which One Doesn't Belong? Design 1

Student Task Statement

1. Choose 3 shapes from the set of cards.
2. Draw a fourth shape to complete the Which One Doesn't Belong.
3. For each shape, discuss one reason why it does not belong.

Which one doesn't belong?

A

B

C

D

2 Which One Doesn't Belong? Design 2

Student Task Statement

1. Choose 2 shapes from the set of cards.
2. Draw a third and fourth shape to complete the Which One Doesn't Belong.
3. For each shape, discuss one reason why it does not belong.

Which one doesn't belong?

A

B

C

D

3 Which One Doesn't Belong? Design 3

Student Task Statement

Create your own Which One Doesn't Belong about any mathematical idea you want others to notice.

Which one doesn't belong?

A

B

C

D