

Grade 2 Unit 9

Lesson 11

CC BY 2021 Illustrative Mathematics®

Unit 9 Lesson 11: All About Tape Diagrams

WU Number Talk: Addition and Subtraction (Warm up)

Student Task Statement

Find the value of each expression mentally.

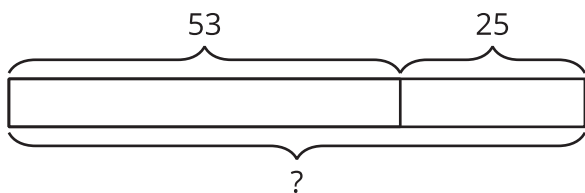
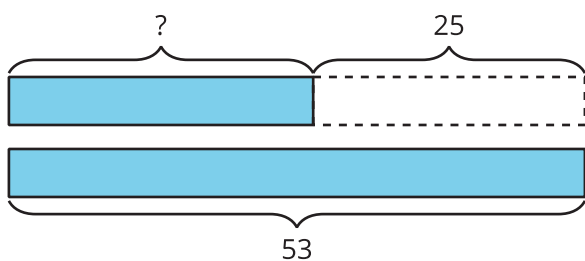
- $7 + 13$
- $27 + 13$
- $40 - 13$
- $40 - 27$

1 Represent Story Problems

Student Task Statement

Match the stories, diagrams, and equations.

Activity Synthesis

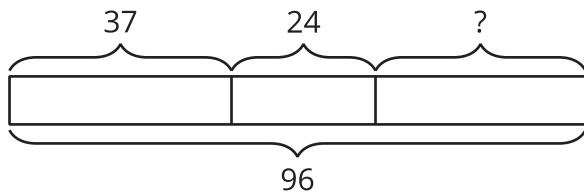


2 Write Stories

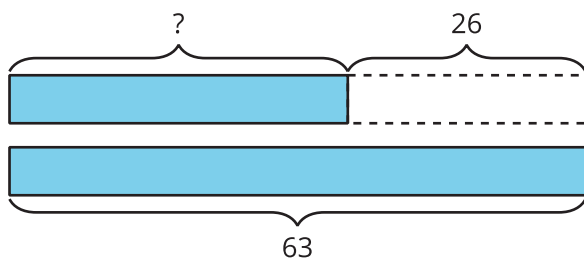
Student Task Statement

Choose one of the diagrams. Write and solve a story problem that the diagram could represent.

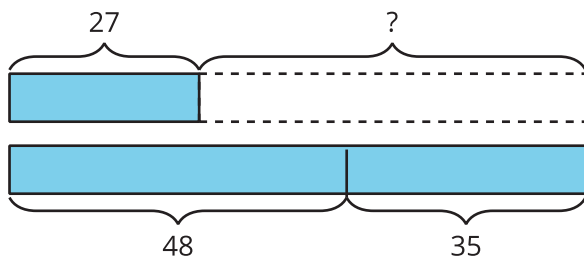
1.



2.



3.



Problem _____