

**Grade 1 Unit 4**

Lesson 10

CC BY 2021 Illustrative Mathematics®

**Unit 4 Lesson 10: Write Two-digit Numbers**

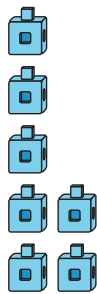
**WU Notice and Wonder: Same Digit, Different Place (Warm up)**

Student Task Statement

What do you notice?


What do you wonder?

**A**



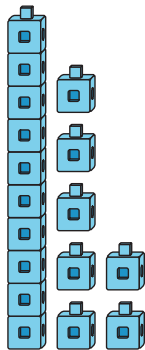
7

**B**




70

**C**



17

**D**



71

---

# 1 Write Numbers to Match Base-Ten Representations

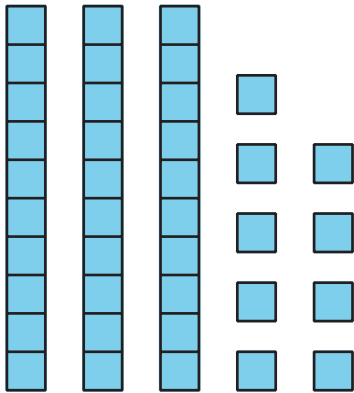
## Student Task Statement

Write the number that matches each representation.

1. 1 ten 4 ones

Number: \_\_\_\_\_

2.



Number: \_\_\_\_\_

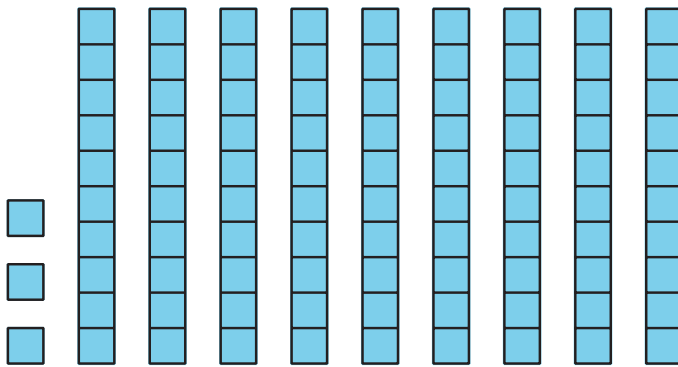
3. 9 tens

Number: \_\_\_\_\_

4.  $20 + 5$

Number: \_\_\_\_\_

5.



Number: \_\_\_\_\_

6.  $7 + 40$

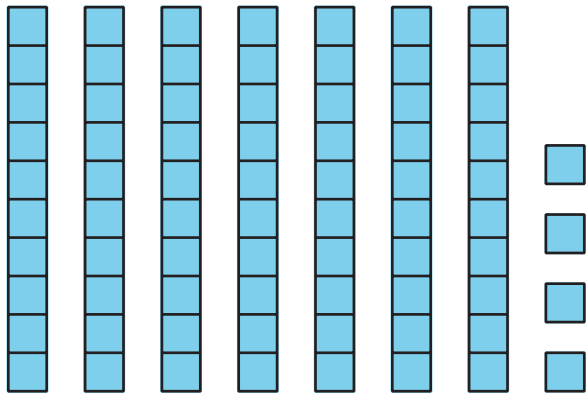
Number: \_\_\_\_\_

7. 2 ones 8 tens

Number: \_\_\_\_\_

8.

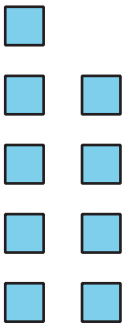
Number: \_\_\_\_\_



9.  $1 + 40$

Number: \_\_\_\_\_

10.



Number: \_\_\_\_\_

## 2 Introduce Write Numbers, Numbers to 99 by 1

Student Task Statement