

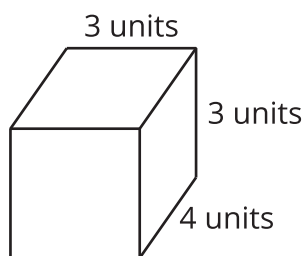
Lesson 18: Which One Doesn't Belong?

- Let's create a Which One Doesn't Belong.

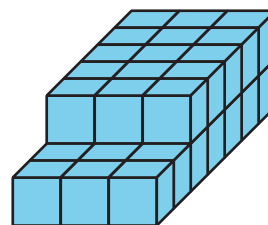
Warm-up: Which One Doesn't Belong? Volume

Which one doesn't belong?

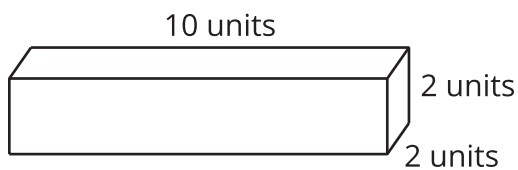
A




B



C



D



18.1: Which One Doesn't Belong? Design 1

1. Choose 3 shapes from the set of cards.
2. Draw a fourth shape to complete the Which One Doesn't Belong.
3. For each shape, discuss one reason why it does not belong.

Which one doesn't belong?

A

B

C

D

18.2: Which One Doesn't Belong? Design 2

1. Choose 2 shapes from the set of cards.
2. Draw a third and fourth shape to complete the Which One Doesn't Belong.
3. For each shape, discuss one reason why it does not belong.

Which one doesn't belong?

A

B

C

D

18.3: Which One Doesn't Belong? Design 3

Create your own Which One Doesn't Belong about any mathematical idea you want others to notice.

Which one doesn't belong?

A

B

C

D