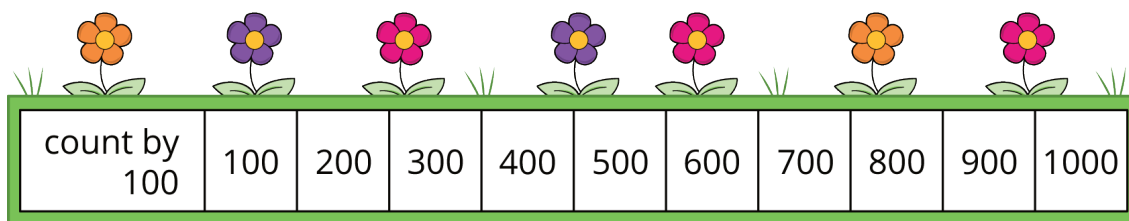


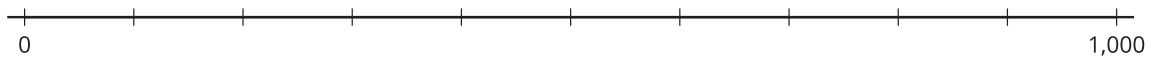
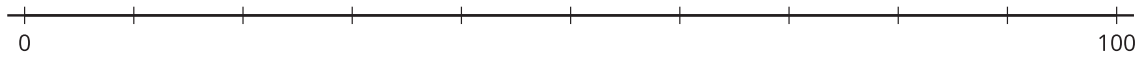
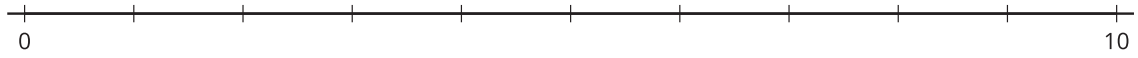
# Lesson 8: Three-digit Numbers on the Number Line

- Let's locate and represent three-digit numbers on the number line.





# 8.1: Label Three-digit Numbers

What do you notice? What do you wonder?



Locate and label 30, 300, and 3 on a number line.

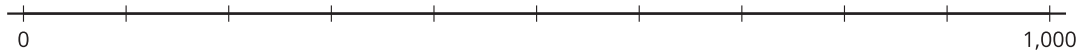
Label each point with a number it represents.



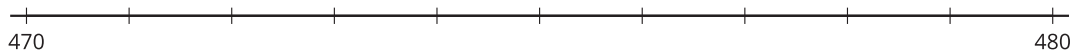
## 8.2: Represent Three-digit Numbers on a Number Line

Locate and label each number on the number line. Label the tick marks with the numbers they represent if it helps.

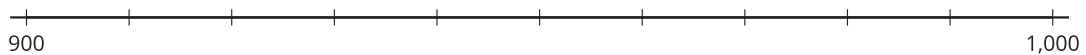
1. 700



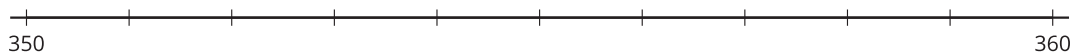
2. 472



3. 940



4. 356



5. 590

